







## Magnets

1. For each of the following pairs of magnets, write if they will **ATTRACT** or **REPEL** each other and say why



.....

.....




.....

.....



.....

.....



.....

.....

2. Add the missing labels to the magnets so that they will do what is written beside them



Attract



Repel



Attract



Repel



Attract



Repel

3. How many uses can you think of for magnets around your house?

4. **Home experiment:** A magnet will attract to magnetic materials. If you have a magnet at home (maybe from the fridge) see what objects it is attracted to.